



Right Angles as Degrees of Turn

1. Follow the directions to sail safely across the ocean.

Finish							
							
							
		Start					

1. Forward 2 squares

2. Right angle turn clockwise

3. Forward 2 squares

4. Right angle turn anticlockwise

5. Forward 2 squares

6. Three quarter turn anticlockwise

7. Forward 3 squares

8. Right angle turn anticlockwise

9. Forward 2 squares

10. Three quarter turn clockwise

11. Forward 7 squares

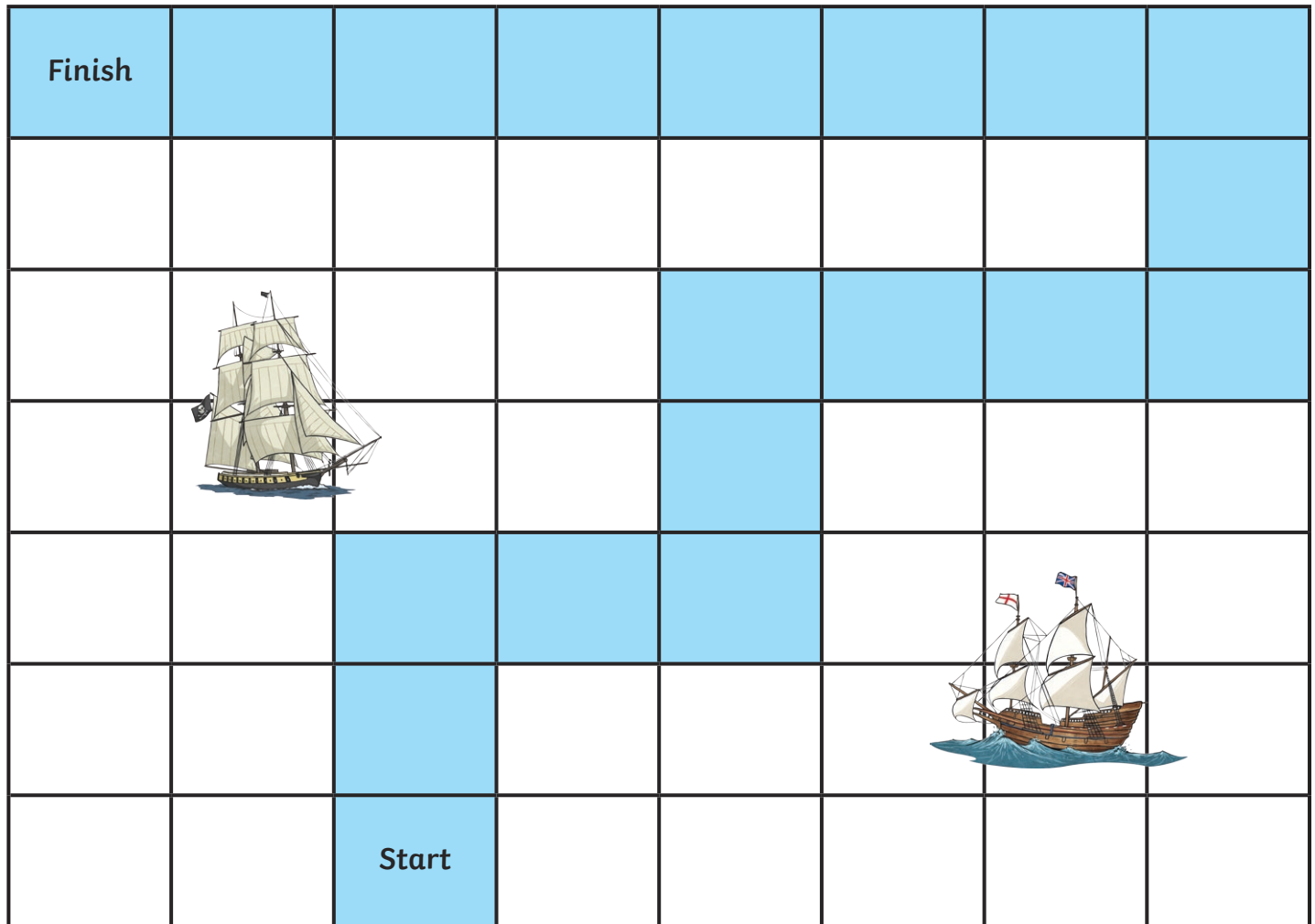
2. Can you write the directions which will allow safe passage across this dangerous sea?

[illegible]

1.	10.
2.	11.
3.	12.
4.	13.
5.	14.
6.	15.
7.	16.
8.	17.
9.	

Right Angles as Degrees of Turn **Answers**

1. Follow the directions to sail safely across the ocean.



1. Forward 2 squares

2. Right angle turn clockwise

3. Forward 2 squares

4. Right angle turn anticlockwise

5. Forward 2 squares

6. Three quarter turn anticlockwise

7. Forward 3 squares

8. Right angle turn anticlockwise

9. Forward 2 squares

10. Three quarter turn clockwise

11. Forward 7 squares

2. Can you write the directions which will allow safe passage across this dangerous sea?

[illegible]

1. Forward 1 square
2. Quarter turn anticlockwise
3. Forward 3 squares
4. Quarter turn clockwise
5. Forward 2 squares
6. Quarter turn clockwise
7. Forward 3 squares
8. Quarter turn anticlockwise
9. Forward 2 squares
10. Quarter turn clockwise
11. Forward 2 squares
12. Quarter turn clockwise
13. Forward 2 squares
14. Quarter turn anticlockwise
15. Forward 2 squares
16. Quarter turn anticlockwise
17. Forward 4 squares